

Trigonometry Final Review Key

1. $7^{\circ}15'14.4''$

2. $\frac{\pi}{4}$

3. $143^{\circ} + 360^{\circ}n$

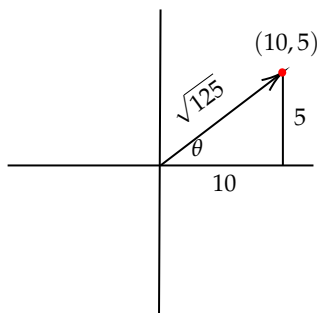
4. 106°

5. 110°

6. $360 * .40 = 144^{\circ} \iff 144^{\circ}00'00''$

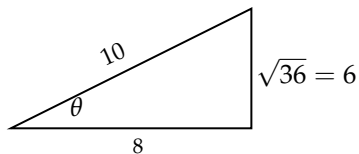
7. $? = 9$

8. $\sin(\theta) = \frac{5}{\sqrt{125}} = \frac{5}{5\sqrt{5}} = \frac{1}{\sqrt{5}} = \frac{\sqrt{5}}{5}$

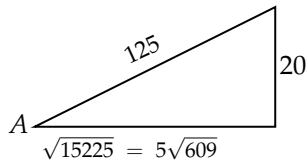


9. Quadrant 3

10. $\csc(\theta) = \frac{6}{10}$ but as it is in Quadrant 3, $\csc(\theta) = \frac{-10}{6}$.

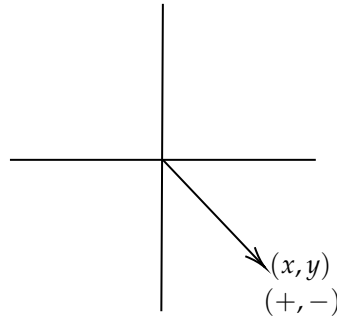


11. $\tan(A) = \frac{20}{5\sqrt{609}} = \frac{4}{\sqrt{609}} = \frac{4\sqrt{609}}{\sqrt{609}}$

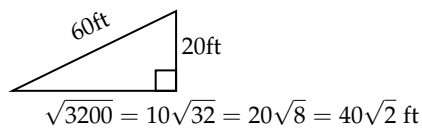


12. Refer to the unit circle. Can be written in degrees as 135° and 225° OR in radians as $\frac{3\pi}{4}$ and $\frac{5\pi}{4}$.

13. $\frac{x}{y}$ is negative.

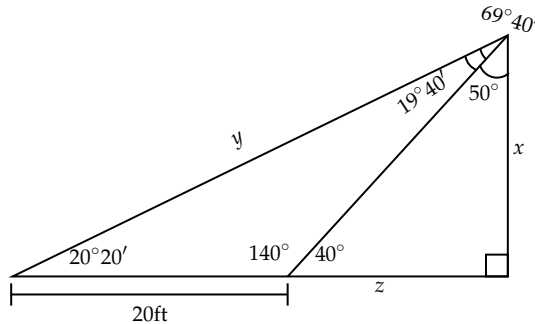


14. The flag pole is $40\sqrt{2}$ or approximately 56.5685 ft away.



15. $\tan(0.000001) = \frac{1}{x}; x = \frac{1}{\tan(0.000001)} = 57295779.57$ ft

16. There are two possible ways to find x .



Method 1.) $\frac{20\text{ft}}{\sin(19^\circ 40')} = \frac{y}{\sin(140^\circ)} \implies y = 38.199$ ft
 Now see that $\sin(20^\circ 20') = \frac{x}{38.199} \implies x = 13.287\text{ft}$.

Method 2.) $\tan(20^\circ 20') = \frac{x}{20+z} \implies (20+z)\tan(20^\circ 20') = x$
 $20(\tan(20^\circ 20')) + z(\tan(20^\circ 20')) = x$
 $20(.371) + .371z = z(.839) \implies 7.42 = .468z$
 $z = 15.855$
 Now see that $\tan(20^\circ 20') = \frac{x}{35.855} \implies x = 13.287$ ft.

17. $1215^\circ \frac{\pi}{180} = \frac{27\pi}{4}$

18. $\frac{12\pi}{5} \frac{180}{\pi} = 432^\circ$

19. $\sec(B) = \frac{\sqrt{85}}{2}$

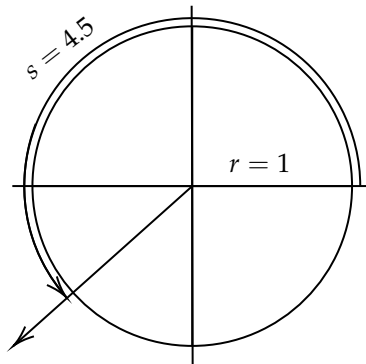
20. $s = r * \theta$

Recognize $35^\circ \implies \frac{7\pi}{36}$

$100 \text{ ft} = x \frac{7\pi}{36} \implies x = 163.7 \text{ ft}$

21. $4.5 = 1 * \theta \implies \theta = 4.5 \text{ radi}$

$\sin(4.5) = .07846$ and $\cos(4.5) = .99692 \implies (-.21, -.98)$



22. $\frac{1}{\sin(x)} = 3.45$

$\frac{1}{3.45} = \sin(x) \implies \sin^{-1} = .294 \text{ radians or } 16.85^\circ$

23. Amplitude = 4, Period = $\frac{2\pi}{3}$

24. 7 upwards

25. (Make sure your calculator is in radians!)

Radians = $3(12) = 36$ radians

$r\sin(\theta) = 75\sin(36) = -74.38$ so 74.38 feet below the horizontal axis.

26. sin tells you the vertical distance above the horizontal axis.

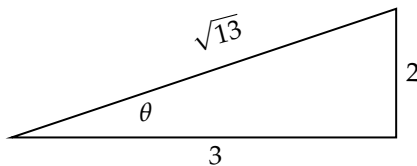
27. Note $\tan(\theta) = \frac{1}{\cot(\theta)}$

Since $\tan(\frac{5\pi}{6}) = \frac{1}{-\sqrt{3}} \implies \frac{-\sqrt{3}}{1} = -\sqrt{3} = \cot(\frac{5\pi}{6})$

28. $s = \frac{2\pi}{3}, \frac{4\pi}{3}$

29. sin is positive in Quadrant 2

$\sin(\theta) = \frac{2}{\sqrt{13}} = \frac{2\sqrt{13}}{13}$



30. $\cot(\theta)\sin(\theta) - \cot(\theta)\tan(\theta)$

$\frac{\cos(\theta)}{\sin(\theta)} (\sin(\theta)) - \frac{\cos(\theta)}{\sin(\theta)} (\frac{\sin(\theta)}{\cos(\theta)}) = \cos(\theta) - 1$

31. $\frac{1}{\cos(x)} \frac{\cos(x)}{\sin(x)} \frac{\sin(x)}{1} = \frac{\cos(x)}{\sin(x)} \frac{\sin(x)}{\cos(x)} = 1$

32. $\cot(x) \frac{\sin(x)}{1} \frac{\cos(x)}{1} = \frac{\cos(x)}{\sin(x)} \frac{\sin(x)}{1} \cos(x) = \cos^2(x)$

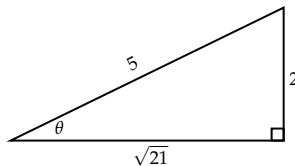
$$33. \sin(45^\circ - 30^\circ) = \sin(45^\circ)\cos(30^\circ) - \sin(30^\circ)\cos(45^\circ)$$

$$\frac{\sqrt{2}}{2}\left(\frac{\sqrt{3}}{2}\right) - \frac{1}{2}\left(\frac{\sqrt{2}}{2}\right) = \frac{\sqrt{6}-\sqrt{2}}{4}$$

$$34. \tan(45^\circ + 60^\circ) = \frac{\tan(45^\circ) + \tan(60^\circ)}{1 - \tan(45^\circ)\tan(60^\circ)} = \frac{1 + \sqrt{3}}{1 - 1(\sqrt{3})} = \frac{1 + \sqrt{3}}{1 - \sqrt{3}} = \frac{1 + \sqrt{3}}{1 - \sqrt{3}} \cdot \frac{1 + \sqrt{3}}{1 + \sqrt{3}} = \frac{1 + 2\sqrt{3} + 3}{1 - 3} = \frac{4 + 2\sqrt{3}}{-2}$$

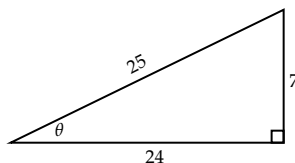
$$= -\sqrt{3} - 2$$

35. Note $\sin(\theta) = 2\sin(\theta)\cos(\theta)$. Since $\sin(\theta) = \frac{2}{5}$ we have the following diagram:



and since $\cos(\theta) < 0$ then $\cos(\theta) = -\frac{\sqrt{21}}{5}$. So we get $2\left(\frac{2}{5}\right)\left(-\frac{\sqrt{21}}{5}\right) = -\frac{4\sqrt{21}}{25}$

36. Note $\cos(2\theta) = 2\cos^2(\theta) - 1$. Since $\tan(\theta) = \frac{7}{24}$ we have the following diagram:



and so $\cos(\theta) = \frac{24}{25}$. So we get $2\left(\frac{24}{25}\right)^2 - 1 = .8432$

37. Since $\theta = \sec^{-1}(-\sqrt{2})$ and $\cos(\theta) = \frac{1}{\sec(\theta)}$, then we have $\cos^{-1}\left(\frac{1}{-\sqrt{2}}\right) = \cos^{-1}\left(-\frac{\sqrt{2}}{2}\right) = 135^\circ$ or $\frac{3\pi}{4}$.

$$38. \cos^{-1}\left(\frac{-\sqrt{3}}{2}\right) = 150^\circ \text{ or } \frac{5\pi}{6}$$

39. $\sin^{-1}(-.76) = -49.46^\circ$ but since $0 \leq \theta \leq 360^\circ$ so we get $360 - 49.46 = 310.54^\circ$ and $180 + 49.46 = 229.46^\circ$ as our answers.

$$40. \sin(\arctan(2)) = .8944$$

$$41. \tan(\arctan(4)) = 4$$

42.

$$3\tan(\theta) + 12 = 30$$

$$3\tan(\theta) = 18$$

$$\tan(\theta) = 6$$

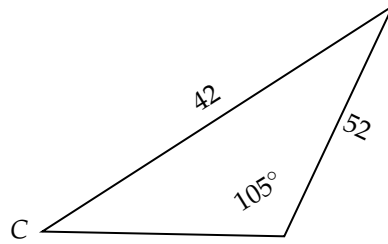
$\tan^{-1}(6) = 80.54^\circ$ which is in quadrant *I*.

$180 + 80.54 = 260.54^\circ$ which is in quadrant *III*.

$$43. \frac{\sin(105)}{42} = \frac{\sin(C)}{52}$$

$$1.196 = \sin(C)$$

$\sin^{-1}(1.196) = \text{so no solution}$

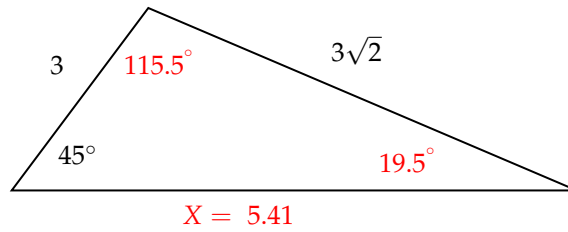


44. $\frac{\sin 45^\circ}{3\sqrt{2}} = \frac{\sin(\theta)}{2}$

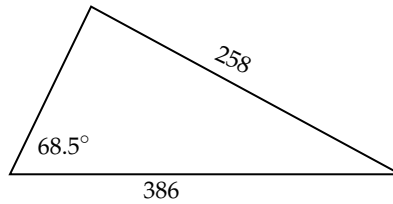
So $\frac{\frac{\sqrt{2}}{2}}{3\sqrt{2}} = \frac{\frac{\sqrt{2}}{2}}{2(3\sqrt{2})} = \frac{1}{6} = \frac{\sin(\theta)}{2} \implies \frac{1}{3} = \sin(\theta) \implies \sin^{-1}(\frac{1}{3}) = 19.5^\circ$

Since triangles are $180^\circ = 45^\circ + 19.5^\circ + x \implies x = 115.5^\circ$

$\frac{3\sqrt{(2)}}{\sin(45^\circ)} = \frac{X}{\sin(115.5^\circ)} \implies X = 5.41$



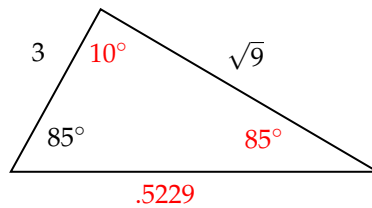
45. $\frac{\sin(68.5^\circ)}{285} = \frac{\sin(\theta)}{386} \implies \sin(\theta) = 1.26 \implies \sin^{-1}(1.26) = \text{no solutions, so no triangles.}$



46. $\frac{\sin(85^\circ)}{\frac{\sqrt{9}}{3}} = \frac{\sin(\theta)}{3} \implies \sin(\theta) = .996 \implies \theta = 85^\circ$

$180^\circ - 85^\circ - 85^\circ = 10^\circ$

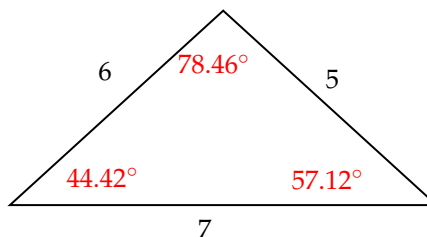
$\frac{X}{\sin(10^\circ)} = \frac{3}{\sin(85^\circ)} \implies X = .5229$



47. $7^2 = 5^2 + 6^2 - 2(5)(6) \cos(A) \implies .2 = \cos(A) \implies A = 78.46^\circ$

$6^2 = 5^2 + 7^2 - 2(5)(7) \cos(B) \implies .542857 = \cos(B) \implies B = 57.12^\circ$

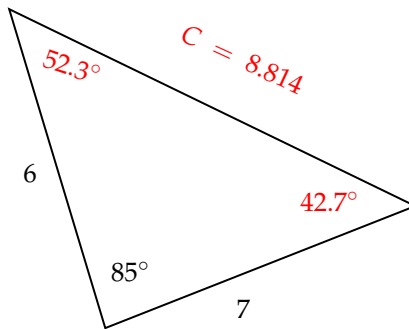
$180 - 78.46 - 57.12 = 44.42$



$$48. \quad C^2 = 6^2 + 7^2 - 2(6)(7) \cos(85) \implies C = \sqrt{77.679}$$

$$6^2 = 7^2 + 8.814^2 - 2(7)(8.814) \cos(B) \implies \cos(B) = .7349 \implies B = 42.7^\circ$$

$$180^\circ - 85^\circ - 42.7^\circ = 52.3^\circ$$



$$49. \quad (a) \quad s = \frac{3+1.3+\sqrt{11.25}}{2} = 3.927$$

$$\text{Area} = \sqrt{3.927(3.927-3)(3.927-1.5)(3.927-\sqrt{11.25})} = 2.25$$

Or the easy way, $\frac{3(1.5)}{2} = 2.25$

$$(b) \quad s = \frac{12+16+25}{2} = 26.5$$

$$\text{Area} = \sqrt{26.5(26.5-12)(26.5-16)(26.5-25)} = \sqrt{6051.9375} = 77.79m^2$$

$$(c) \quad A = \frac{1}{2}(b)(c) \sin(A)$$

$$A = \frac{1}{2}(13.6)(10.1) \sin(42.5^\circ)$$

$$A = 46.4m^2$$

$$50. \quad (a) \quad \theta_c = -26.74^\circ$$

$$\theta_1 = 180 - (-26.74^\circ) = 206.74^\circ$$

$$\theta_2 = 360 + (-26.74^\circ) = 333.26^\circ$$

So our answer in radians should be:

$$\theta_1 = 3.608$$

$$\theta_2 = 5.816$$

$$(b) \quad \theta_c = 51.68^\circ$$

$$\theta_1 = 51.68^\circ$$

$$\theta_2 = 360 - 51.68^\circ = 308.32^\circ$$

So our answer in radians should be:

$$\theta_1 = .902$$

$$\theta_2 = 5.381$$